


Three Like Me: Array

Solve the math problem, and match it to the corresponding array.


$$3 \times 4 = \underline{\quad}$$

12




$$3 \times 6 = \underline{\quad}$$

18




$$3 \times 2 = \underline{\quad}$$

6



$$3 \times 5 = \underline{\quad}$$

15



$$3 \times 3 = \underline{\quad}$$

9

