



Three Like Me: Array

Solve the math problem, and match it to the corresponding array.


$3 \times 4 = \underline{\hspace{2cm}}$




$3 \times 6 = \underline{\hspace{2cm}}$



$3 \times 2 = \underline{\hspace{2cm}}$



$3 \times 5 = \underline{\hspace{2cm}}$



$3 \times 3 = \underline{\hspace{2cm}}$

